



Place Value Pirates


Created by
Karen Pederson

Graphics by
thistlegirldesigns.com

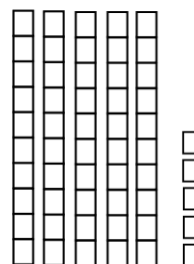

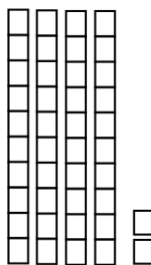
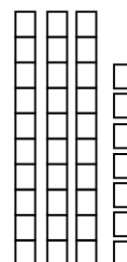



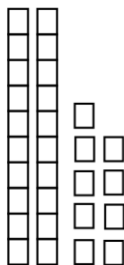
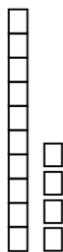

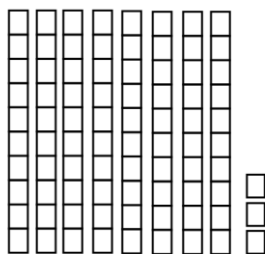

graphics © thistlegirldesigns.com

Place Value Pirates

Name _____




Directions: Count the tens and ones. Write the number on the line.



Place Value Pirates

Name _____



Write the number in three different ways.

Tens	Ones
4	8

_____ tens + _____ ones

_____ + _____

Tens	Ones
9	2

_____ tens + _____ ones

_____ + _____

Tens	Ones
1	4

_____ tens + _____ ones

_____ + _____

Place Value Pirates



Name _____

Write the number in three different ways.

Tens	Ones
7	9

_____ tens + _____ ones

_____ + _____

Tens	Ones
8	5

_____ tens + _____ ones

_____ + _____

Directions: Count the tens and ones. Write the number on the line.

